

MODEL QUESTION PAPER

CLASS 3RD

SUBJECT- EVS

TIME ALLOWED: 3HRS


MAXIMUM MARKS: 50

Q.1. Choose the correct option.

(5x1=5)

(i) After how many years is Kumbh Mela held in India?

- (a) 15 years ☐
- (b) 12 years ☐
- (c) 10 years ☐
- (d) 21 years ☐

(ii)  This sign board indicates:

- (a) Men at work ☐
- (b) No U-turn ☐
- (c) Speed breaker ☐
- (d) No Horn Please ☐

(iii) The height of Mount Everest is:

- (a) 8848 metres ☐
- (b) 8488 metres ☐
- (c) 8898 metres ☐
- (d) 8884 metres ☐

(iv) Tulsi plant is a type of:

- (a) Herb ☐
- (b) Shrub ☐
- (c) Creeper ☐
- (d) Climber ☐

(v) Chhappan Bhog contains how many varieties of food items:

- (a) 56 ☐
- (b) 66 ☐
- (c) 36 ☐
- (d) 46 ☐

Q.2. Put the (✓) sign of right box and (x) sign of wrong option.

(5x1=5)

- (i) "Gutru-Gu" sound is made by hen. ☐
- (ii) People make mud houses to keep them cool inside. ☐
- (iii) The green dustbin is used for things like fruit peels, vegetable waste or egg shells. ☐
- (iv) Things that you can see through are called opaque. ☐
- (v) We should drink 6-8 glasses of water is a day. ☐


Q.3. Fill in the blanks:

(5x1=5)

- (i) Cow lives in a _____.
- (ii) Top most layer of Earth is called _____.
- (iii) _____ is the tallest grass.
- (iv) The Sarhul festival is celebrated in _____ season.
- (v) _____ is the world's biggest festival.

Q.4. Match the following:

(5x1½=2½)

- | | |
|---|-----------|
| (i) Lost and found booth | Holi |
| (ii) Fresh air | No U-Turn |
| (iii) Tomato | Plants |
| (iv) Gujiya | Herbs |
| (v)  | Mela |

Q.5. Answer the following questions (any five):

(5x2= 10)

- (i) How are we dependent of plants and animals?
- (ii) What is the process of pot making?
- (iii) Why do we need different kinds of food?
- (iv) What is soil made up of?
- (v) How does the root helps a plant to grow?
- (vi) What are trees?
- (vii) What kind of vehicles do we see around us?

Q.6. (i) Define transparent, opaque and translucent materials:

(2½x2=5)

Transparent materials

Opaque materials

Translucent materials

(ii) Tell about any three types of houses and what they are made of? Also write the names of that house.

Q.7. (a) List out five things in each group:

(3x3=9)

Natural

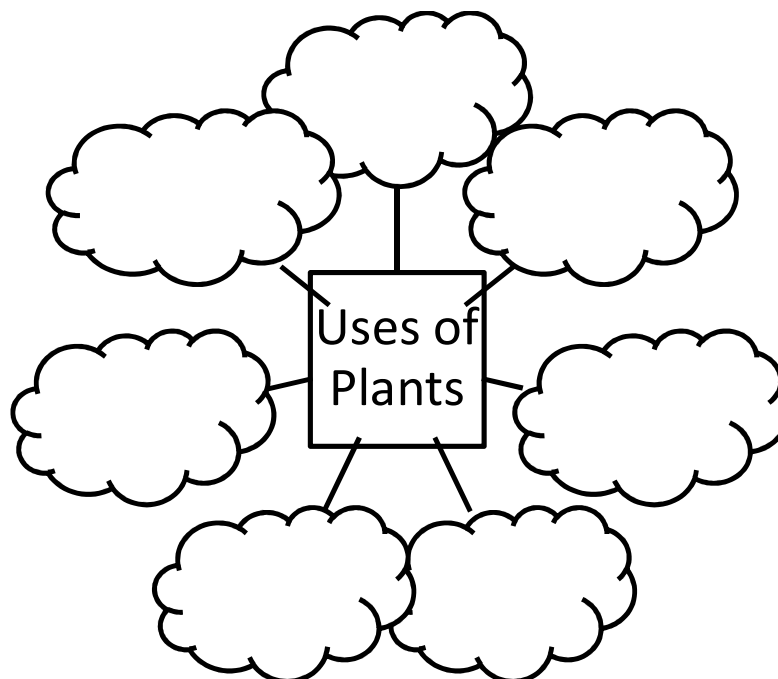
Artificial

(b) Write the recipe of your favourite dish.

(c) List all the activities you can think of, for which we need water.

Q.8. Find out and write the uses of plants.

(3½)



Q.9. Do you hear sound of birds:

(5)

Name of bird	Sound made
1.	
2.	
3.	
4.	
5.	

Blue Print

Knowledge based 20%			Understanding based 43 %			Application/Skill 37%		
VSA	SA	LA	VSA	SA	LA	VSA	SA	LA
5(1)	-	2.5(2)	5(0.5)	10(1)	3(3)	5(1)	5 (2)	3.5(1)
5 Marks	-	5 Marks	2.5 Marks	10 Marks	9 Marks	5 Marks	10 Marks	3.5 Marks
10 Marks			21.5 Marks			18.5 Marks		

Marks Distribution

- Q1. Choose the correct option** **5x1= 5**
- Q2. Put the (✓) sign of right box and (x) sign of wrong option.** **5x1= 5**
- Q3. Fill in the blanks:** **5x1= 5**
- Q4. Match the following:** **5x0.5= 2.5**
- Q5. Answer the following questions (any five):** **5x2= 10**
- Q6. (i)** **2.5x2= 5**
(ii)
- Q7. (a)** **3x3=9**
(b)
(c)
- Q8.** **3.5x1= 3.5**
- Q9.** **5x1= 5**